

## Unit 5 Study Guide

### Field Photograph

Use this field photograph to help answer Questions 6-8.

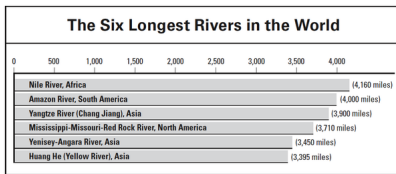


1. What climate zone is shown in the photo?  
A. \_\_\_\_\_  
B. \_\_\_\_\_
2. What economic activity is shown in the photo?  
A. \_\_\_\_\_  
B. \_\_\_\_\_
3. In what physical feature is tropical grassland the most typical vegetation?  
A. \_\_\_\_\_  
B. \_\_\_\_\_
4. What is the best definition of a river basin?  
A. \_\_\_\_\_  
B. \_\_\_\_\_
5. What aspect of life in Egypt depends most on the water stored in Lake Nasser?  
A. \_\_\_\_\_  
B. \_\_\_\_\_
6. Read the text below. What part of the Nile River basin does it describe?

This area has the richest farmland in all of Africa. Since ancient times, much of Egypt's food has been grown here.

- A. \_\_\_\_\_
- B. \_\_\_\_\_
7. What was Egypt's main reason for building the Aswan High Dam?  
A. \_\_\_\_\_  
B. \_\_\_\_\_

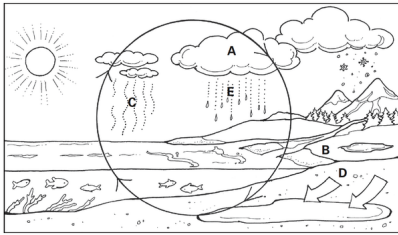
8. Write a conclusion that is supported by the graph



- A. \_\_\_\_\_  
 B. \_\_\_\_\_

**Applying Geography Skills: Reading a Diagram**

Use the diagram and your knowledge of geography to complete the tasks below.



9. Match each letter on the diagram to one of the terms below. Write the letters on the lines.

- \_\_\_\_\_ condensation    \_\_\_\_\_ precipitation  
 \_\_\_\_\_ evaporation    \_\_\_\_\_ runoff  
 \_\_\_\_\_ infiltration

10. Describe what happens during the water cycle. Use the terms from the previous question.

11. What is the best definition of a micro-enterprise?

- A. \_\_\_\_\_
- B. \_\_\_\_\_

12. List 3 benefits provided by women who start small businesses in Africa.

- A. \_\_\_\_\_
- B. \_\_\_\_\_
- C. \_\_\_\_\_

13. In traditional societies with gender-based division of labor, the kind of work a person does depends mainly on that person's

- A. \_\_\_\_\_
- B. \_\_\_\_\_

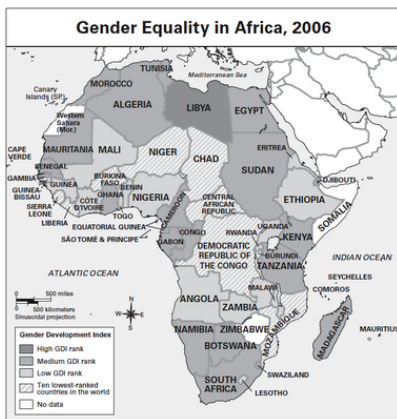
14. Read the description and then complete the sentence below.

Kalerwe market is an amazing place to visit. From the center of the market, stalls stretch as far as the eye can see. Kalerwe is known as the “poor man’s market.” But it attracts all kinds of people who are drawn by its bargain prices.

Markets like the one described above are part of Africa's

- A. \_\_\_\_\_
- B. \_\_\_\_\_

15. Write a conclusion about men and women in Africa that is best supported by the map.



- A. \_\_\_\_\_
- B. \_\_\_\_\_

16. What is the most common problem faced by poor women in developing countries who want to start businesses?

- A. \_\_\_\_\_
- B. \_\_\_\_\_

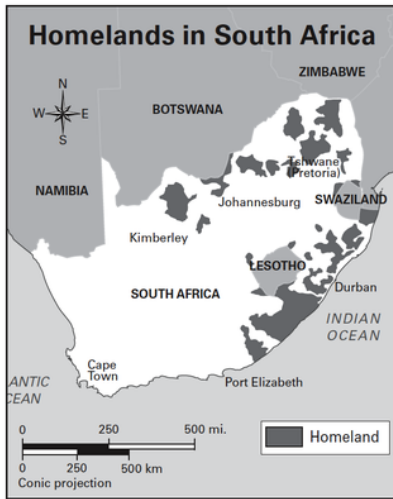
17. List 3 things that have contributed to widespread poverty in Africa.

- A. \_\_\_\_\_
- B. \_\_\_\_\_
- C. \_\_\_\_\_

18. Which was the central purpose of South Africa's apartheid policy?

- A. \_\_\_\_\_
- B. \_\_\_\_\_

19. During apartheid, which ethnic group was moved to the dark areas shown on the map?



- A. \_\_\_\_\_
- B. \_\_\_\_\_

20. How did the apartheid policy affect Asians and coloreds in South Africa?

- A. \_\_\_\_\_
- B. \_\_\_\_\_

21. How did the end of apartheid affect the distribution of political power in South Africa?

- A. \_\_\_\_\_
- B. \_\_\_\_\_

22. How has the Employment Equity Act affected job opportunities in South Africa since 1998?

- A. \_\_\_\_\_
- B. \_\_\_\_\_

23. What educational goals has South Africa emphasized since the end of apartheid?

- A. \_\_\_\_\_
- B. \_\_\_\_\_