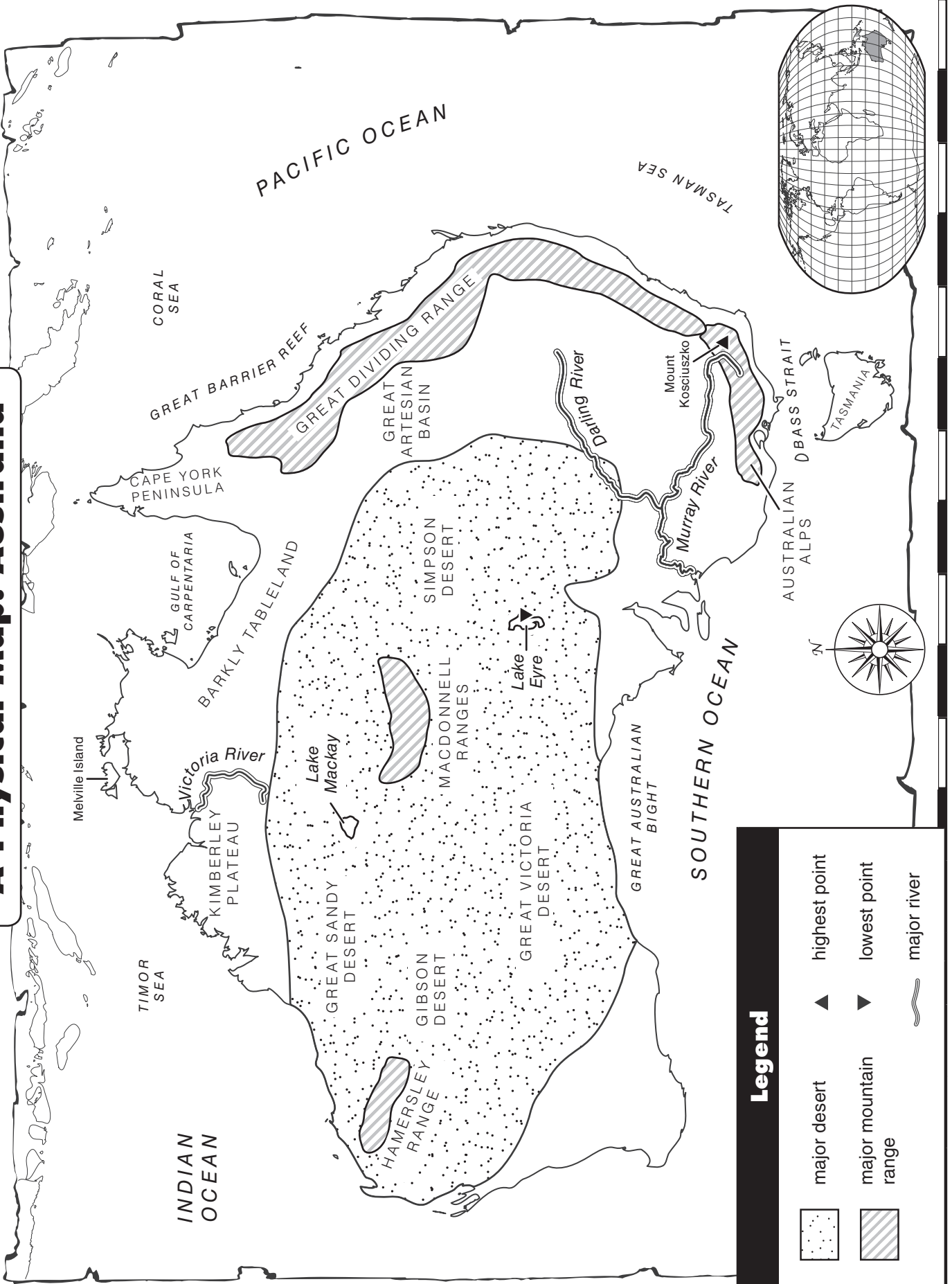







A Physical Map: Australia

Name _____



Legend

-  major desert
-  major mountain range
-  highest point
-  lowest point
-  major river



A Physical Map: Australia

Monday

1. Australia is a large island continent. Which labeled oceans and seas surround the continent?

2. Australia has four major deserts. Name them.

Tuesday

1. Which mountains are on the south end of the Great Dividing Range?

2. Which labeled islands are part of the continent of Australia?

Wednesday

1. Which river is the longest in Australia? Where is it located?

2. Name five inland waterways of Australia.



A Physical Map: Australia

Thursday

1. What is the area on the map called that is a strip of water that connects the Tasman Sea with the Southern Ocean?

2. What is the name of the long chain of coral reefs, and where is it located in Australia?

Friday

1. Name the two large areas of the ocean that are partly surrounded by land.

2. Which landform is a high, broad, level plateau—the Barkly Tableland or the Great Artesian Basin?

Challenge

The lowest and highest points of Australia are labeled on the map. Find out the elevations of Lake Eyre and Mount Kosciuszko and write them on the map. Use a reference physical map to help you.